

KAMPALA QUALITY PRIMARY SCHOOL

P.3 REMEDIAL REVISION WORK SET 4, 2020

LITERACY 1B FOR P.3

Name:

Stream :

FOR
EXAMINERS'
USE ONLY

Read the following instructions carefully:

1. The paper has two sections: **A** and **B**.
2. Section **A** has 40 questions (40 marks)

3. Section **B** has 15 questions (60 marks).
4. Answer **all** questions. All answers to both Sections **A** and **B** must be written in the Spaces provided.
5. All answers must be written using a blue or black ball point pen or ink. Diagrams should be drawn in pencil.
6. Unnecessary alteration of work may lead to loss of marks.
7. Any handwriting that can not easily be read may lead to loss of marks.
8. Do not fill any thing in the boxes. They are for examiners' use.

FOR EXAMINERS' USE ONLY

Qn No.	MARKS	SIGN.
1 – 10		
11-20		
21-30		
31- 40		
41 - 43		
44 - 46		
47 - 49		
50 - 52		
53 – 55		
TOTAL		

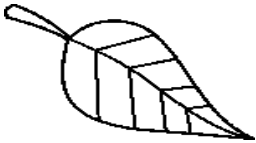
SECTION A (40 MARKS)

1. Write one component of the environment.
-
2. Apart from eyes, mention any other sense organ that help us to know that something is burning.
-

3. Which animal provides security at home?
-

4. Why is it a good health habit to wash hands after visiting a toilet?
-

5. How is the part shown useful to a plant?



6. Why do we boil water for drinking?
-

7. What food value do we get from eating fish?
-

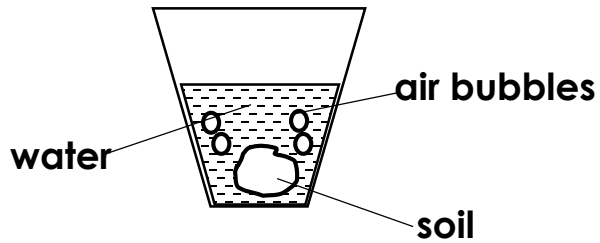
8. In which component of a clean home is rubbish disposed?
-

9. Mention one item found in a first aid box.
-

10. Give one body exercise done at school.
-

11. In which season do farmers harvest crop?
-

12. P.3 children carried out the experiment below.



What does the experiment above prove about soil?

13. Why is a doll called a non living things?

14. Name the insect vector for trachoma.

15. To which plant system does the stem and flowers belong?

16. Write one importance of trees in the school compound.

17. What is the main source of light?

18. What good health practice prevents bad smell on our bodies?

19. Which type of weather is managed by the item shown?



20. Underline the odd man out.

chicken, duck, eagle, turkey

21. Mention one use of wind to man.

22. Mention any one member of a family.

23. Which childhood disease is immunised at birth?

24. Mention one use of wind to man.

25. How do mushroom reproduce?

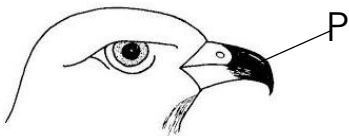
26. Mention any one product got from hides and skins.

27. What do we call food made by plants?

28. Which type of soil is suitable for pottery?

29. Apart from beef, what other product is got from cows?

30. **The diagram below shows the head of a bird.**



Name part P.

31. Slithering is to snake as _____ to fish.

32. What vitamin is made using light from the sun?

33. On which part of an insect are the legs and wings attached?

34. Which animal stays in a hutch?

35. How are spiracles useful to a housefly?

36. In the space below, draw a garden tool for collecting rubbish.



37. Write one material used when washing clothes.

38. Name one food stuff preserved by smoking.

39. Mention one place where people can cross a busy road safely.

40. What are germs?

SECTION B (60 MARKS)

41. a) What is food? _____

b) State the two main sources of food.

i) _____ ii) _____

c) Apart from milk, state any other source of proteins.

42. a) Give the use of each of the following body parts.

i) eyes _____ ii) ears _____

iii) skin _____

b) Write one way you can care for your teeth.

43. **Match list A with list B.**

List A

List B

Man

gills

i)

Man

Insect

stomata

ii)

Insect

Fish

spiracles

iii)

Fish

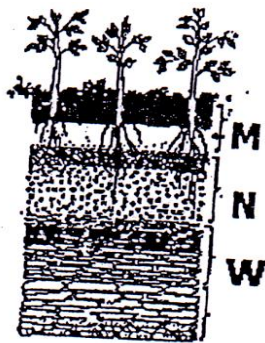
Plants

lungs

iv)

Plants

44. **The diagram below shows the arrangement of soil layers.**



a) Name the layers labelled M and N.

M _____ N _____

b) Why is layer M good for plant growth?

c) What name is given to the structure shown above?

45. **Complete the table correctly.**

Animal	Home
_____	Kraal
bee	_____
_____	sty

dog	_____
-----	-------

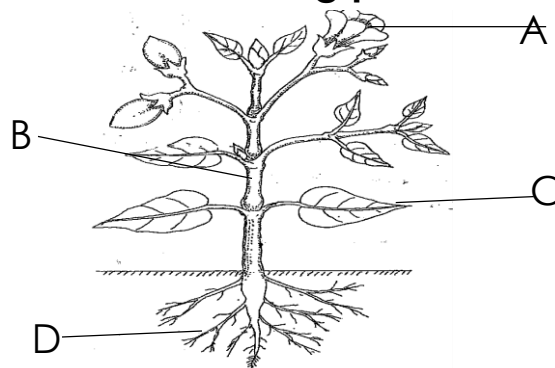
46. a) What is a pest? _____

b) Write any two examples of crop pests.

i) _____ ii) _____

c) Give one way of controlling crop pests.

47. **The diagram below is of a flowering plant. Use it to answer questions that follow.**



a) Name parts marked A and B.

A _____ B _____

b) Write one use of part C to a plant.

c) Which part sucks water for the plant?

48. Soil erosion is the gradual removal of topsoil by its agents.

a) Identify one agent of soil erosion.

b) Write one cause of soil erosion.

c) Mention two ways of controlling soil erosion.

i) _____

ii) _____

49. a) What is air? _____

b) Write any one property of air.

c) Which part of air is necessary for;

i) burning _____

ii) photosynthesis _____

50. a) What are living things?

b) Write down any two groups of living things.

i) _____ ii) _____

c) In which group of living thing is a mushroom?

51. a) Write any two elements of weather.

i) _____ ii) _____

b) Which element of weather is suitable for drying clothes?

c) Mention one danger of rainy weather.

52. Below is a list of activities done by a person to promote personal hygiene.

- **bathing daily**

- **brushing teeth**

- **combing hair**

- **cutting finger nail short**

a) Which activity helps to prevent tooth decay?

b) Which activity prevents bad smell from the body?

c) Which activity removes hiding places for germs in nails?

d) Write one item used to cut finger nails short.

53. a) Write any two examples of insect vectors.

i) _____ ii) _____

b) Why are vectors dangerous to man?

c) Write one way of controlling vectors.

54. a) Give two reasons for giving first Aid.

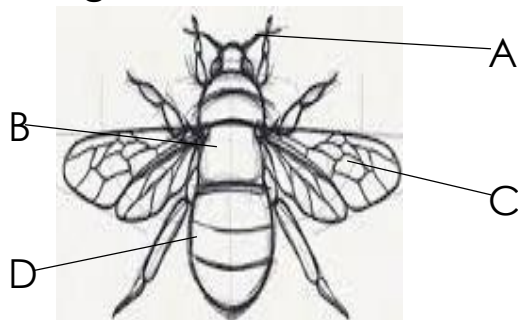
i) _____

ii) _____

b) Write any two items found in the first Aid box.

i) _____ ii) _____

55. **Below is a diagram of an insect. Use it to answer questions that follow.**



a) Name the parts labelled.

B _____ C _____

b) How is part D useful to an insect?

c) Which part help insects to feel?
